

TEKART LEARNING

P. 1 MATHEMATICS WEEKEND HOMEWORK TERM III, WEEK TWO

NAME: _____ STREAM: _____

SECTION A

1. Write 9 in words.

2. Subtract

$$\begin{array}{r} 9 \\ - 2 \\ \hline \end{array}$$

3. Who is heavier?



Sarah

10kg



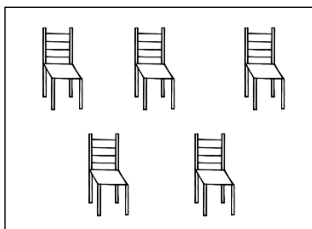
John

8kg


4. Expand 38 using values.

$$38 = \underline{\hspace{2cm}} + \underline{\hspace{2cm}}$$

5. Name this set.



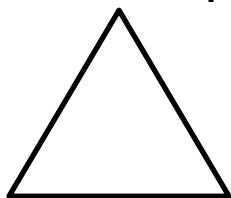
6. Tell the time on the clock face below.



7. Arrange these numbers starting with the smallest.

9, 5, 7, 2



8. Name the shape below.



9. Add;

$$\frac{7}{11} + \frac{2}{11} =$$

10. Draw pictures for the answer.



SECTION B

11(a) Write the number names.

(i) 48 = _____

(ii) 12 = _____

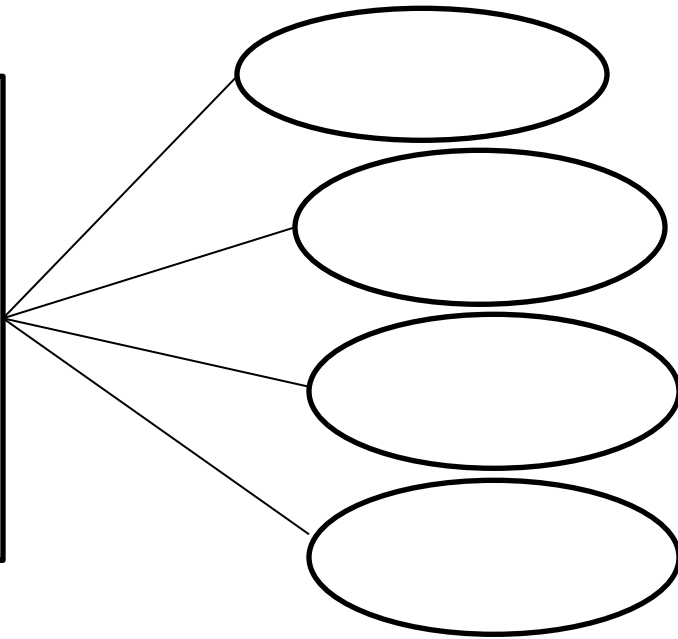
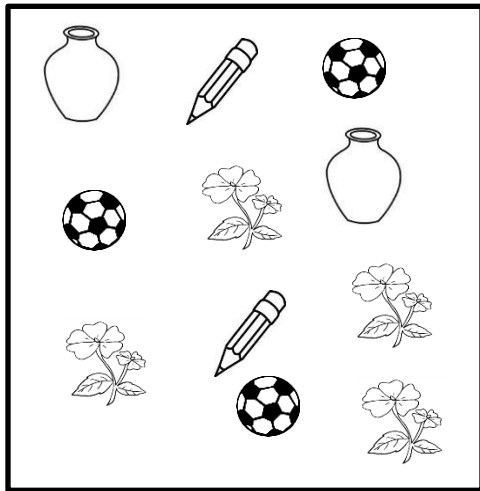
(iii) 125 = _____

(b) Write in figures.

(i) a half = _____

(ii) second = _____

12. Form new sets.



How many members are in the biggest set formed?

13. Read and workout

(a) One cat has 2 ears. How many ears do 5 cats have?

(b) Mary had $\frac{6}{8}$ of an apples. She ate $\frac{2}{8}$. What fraction did she remain with?

(c) Musoke has 24 cars. Male has 13 cars. How many cars do they have altogether?

(d) Divide $12 \div 3 =$

(e) How many days are in 2 weeks?